

1) Alcohols are very important organic compounds. Discuss briefly their classification and give one example each.

A) This is based on the Number of hydrogen atoms attached to the carbon atom containing the hydroxyl group. If the numbers of hydrogen atoms attached to the carbon atom bearing the hydroxyl group are three or two, it is called a primary alcohol (1°). If it is one hydrogen atom, it is called secondary alcohol (2°) and if no hydrogen atom is attached to the carbon atom bearing the hydroxyl group, it is called tertiary alcohol (3°).
E.g. CH_3OH Methanol (1°)

B) This is based on the Number of hydroxyl groups they possess. Monohydric alcohols have one hydroxyl group present in the alcohol structure. Dihydric alcohols are also called glycols have two hydroxyl groups present in the alcohol structure while trihydric alcohols or triols have three hydroxyl groups present in the structure of the alcohol. Polyhydric alcohols or polyols have more than three hydroxyl groups. E.g. $\text{CH}_3\text{CH}_2\text{CH}_2\text{OH}$ Propanol (Monohydric Alcohol)

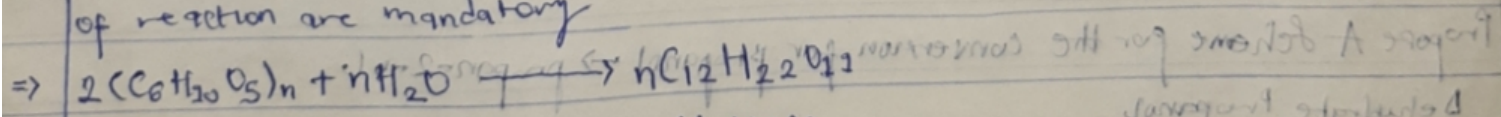
2) Discuss the Solubility of Alcohols in water, organic solvents.

Lower alcohols with up to three carbon atoms in their molecules are soluble in water because these lower alcohols can form hydrogen bond with water molecules.

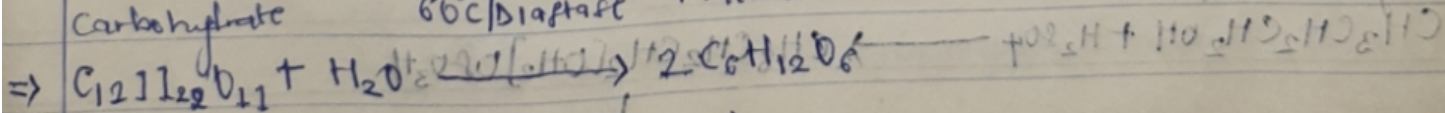
The water solubility of alcohols decreases with increasing relative molecular mass.

All Monohydric alcohols are soluble in organic solvents. The solubility of simple alcohols are polyhydric alcohols is largely due to their ability to form hydrogen bonds with water molecules.

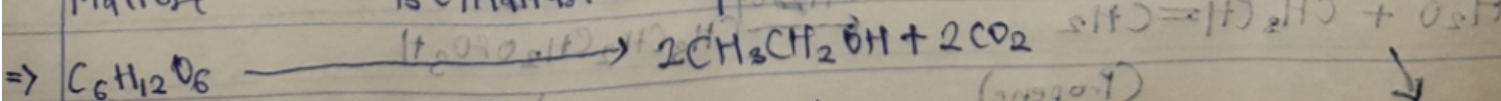
3) Show the three steps in the industrial manufacture of ethanol equations of reaction are mandatory



Carbohydrate $\xrightarrow{60^\circ\text{C}/\text{Diastase}}$ Maltose



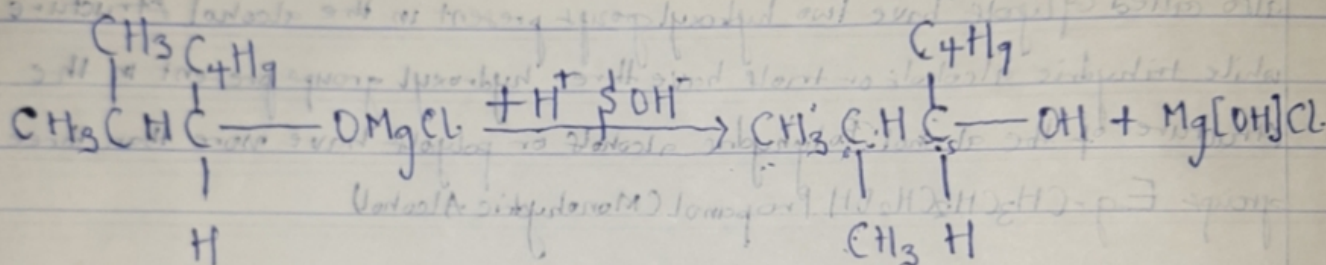
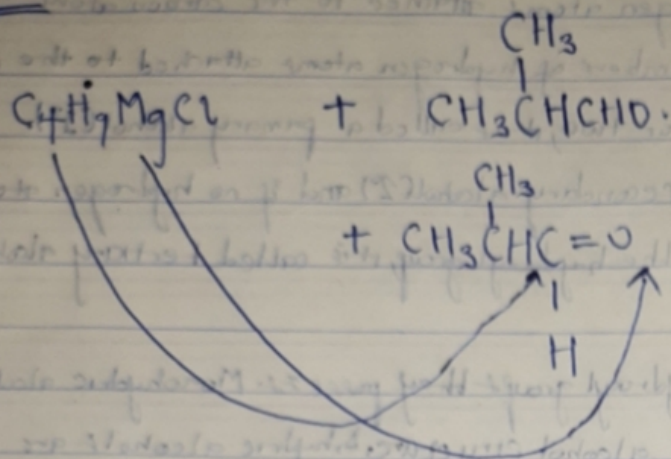
Maltose $\xrightarrow{15^\circ\text{C}/\text{Maltase}}$ Glucose



Glucose $\xrightarrow{15^\circ\text{C}/\text{Zymase}}$ Ethanol

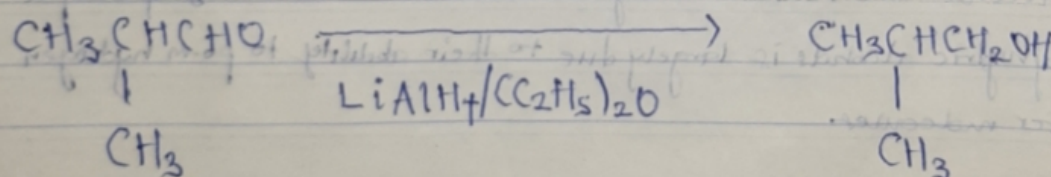
4) Show the reaction between 2-Methylpropanal and Methyl Butyl Magnesium chloride

ANS



6-methylheptan-5-ol

7) Show the Reduction rxn of 2-methylpropanal




2-methylpropanal

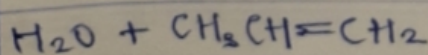
2-methylpropanol

8) Propose A scheme for the conversion for propanal \rightarrow propan-2-ol

Dehydrate Propanol

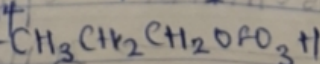


$\downarrow -H_2O$

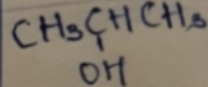


(Propene)

$\xrightarrow{-H_2SO_4}$



propyl hydrogen sulphide



(Propan-2-ol)