

Name: Anyaorah Lotanna Nchokwube

Department: ~~Physics~~ Science

Matric No: 19/Sci09/001

Course title: General Chemistry II

Question

1. Give the IUPAC names of the following organic compound.
- CH_3OCH_3 , $\text{C}_2\text{H}_5\text{OCH}_2\text{CH}_3$, $\text{C}_4\text{H}_9\text{OC}_2\text{H}_5$, $\text{C}_2\text{H}_5\text{O}(\text{C}_2\text{H}_5)_2$,
 $\text{CH}_3\text{CH}_2\text{OCH}_3$, $\text{C}_2\text{H}_5\text{OCH}_2\text{CH}_2\text{CH}_3$

Soln

1. $\text{CH}_3\text{OCH}_3 \rightarrow$ methoxy methane
2. $\text{C}_2\text{H}_5\text{OCH}_2\text{CH}_3 \rightarrow$ ethoxy ethane
3. $\text{C}_4\text{H}_9\text{OC}_2\text{H}_5 \rightarrow$ butoxy ethane
4. $\text{C}_2\text{H}_5\text{O}(\text{C}_2\text{H}_5)_2 \rightarrow$ methoxy ethane
5. $\text{C}_2\text{H}_5\text{OCH}_2\text{CH}_2\text{CH}_3 \rightarrow$ ethoxy propane

2. Discuss the properties of ethers.

Soln

1) Physical States \rightarrow At room temperature, ethers are colorless, neutral liquids with pleasant odors.

2) Solubility \rightarrow Ethers are less soluble in water than are the corresponding alcohols. Lower molecular weight ethers such as methoxy methane and methoxy ethane are fairly soluble in water since the molecules are able to form hydrogen bonds in the water molecules but as the hydrocarbon content of the molecules increases, there is a rapid decline in solubility. They are miscible with most organic solvents.

3. Density: Most of the simple ethers are less dense than water, although the density increases with increasing relative molecular mass and some of the aromatic ethers are in fact denser than water.

4. Boiling point: Low molecular mass ethers have a lower boiling point than the corresponding alcohols but those ethers containing alkyl radicals larger than four carbon atoms the reverse is true. The boiling points of ethers tend to approximate those of hydrocarbons of same relative molecular mass from which it can be concluded that the molecules are not associated in the liquid phase as there are no suitably available hydrogen for association through hydrogen bonds.


5. Reactivity: Ethers are inert at moderate temperature. Their inertness at moderate temperature leads to their wide use as reaction media.

3. Discuss explicitly two methods of preparing ethers and show equations of reaction.

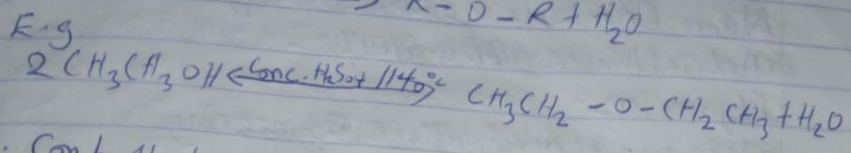
Solution

1. Partial dehydration of alcohols

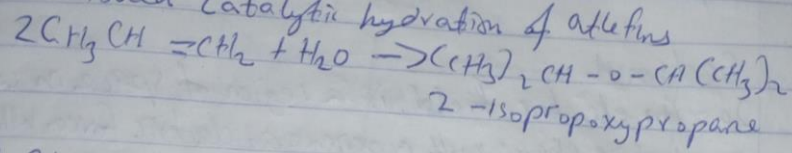
Simple ethers are manufactured from alcohols by catalytic dehydration. The alcohol is in excess and concentrated tetraoxosulphate(VI) acid is heated at a carefully maintained temperature of 140°C . This process is known as continuous etherification, if excess alcohol is not used the temperature is as high as $170 - 180^{\circ}\text{C}$, further dehydration to yield alkenes occurs.



E.g.



2. Controlled catalytic hydration of alkenes



H) State three uses of Ethylene oxide.

Solution

1. Ethylene oxide is used as an intermediate in the hydrolytic manufacture of ethylene glycol.
2. Ethylene oxide is used in the preparation of nonionic emulsifying agents, plastics, plasticizers and several synthetic textiles.
3. Ethylene oxide is used as a gaseous sterilizing agent.